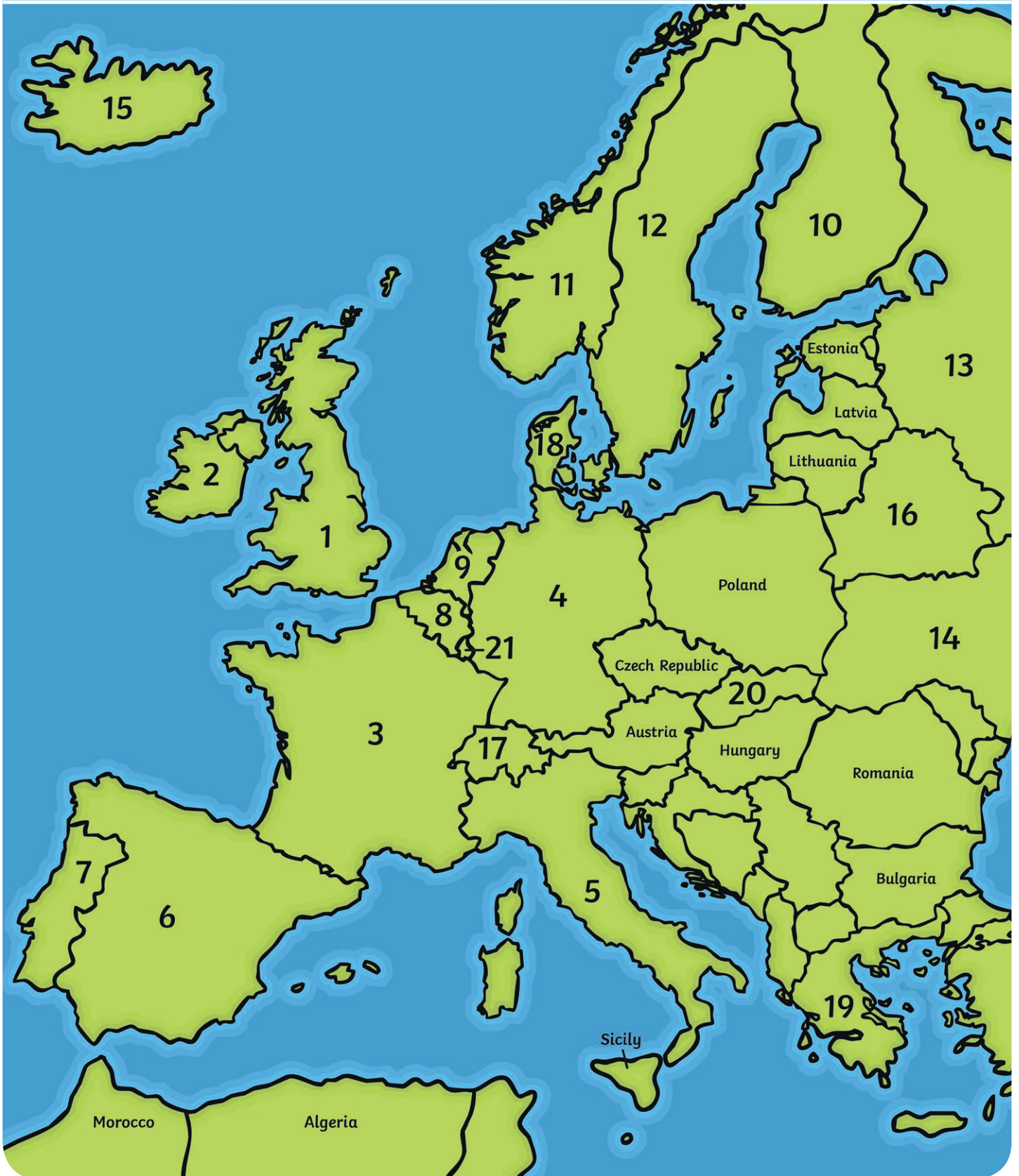


Map of Europe



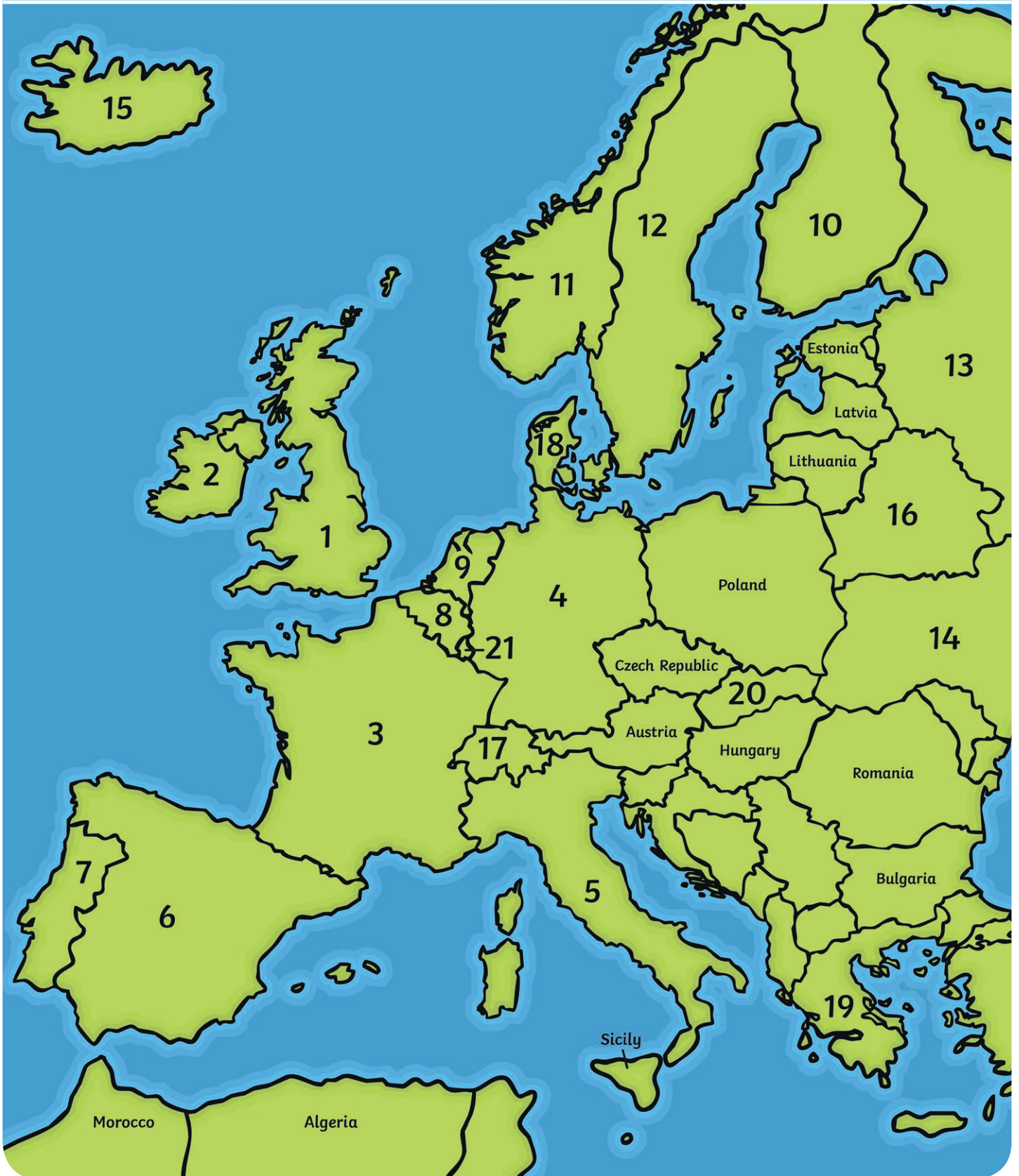
Country Names

How well do you know Europe? Fill in the names of the numbered countries. Don't forget capital letters!

- | | |
|-------------|-------------|
| 1. U _____ | 12. S _____ |
| 2. R _____ | 13. R _____ |
| 3. F _____ | 14. U _____ |
| 4. G _____ | 15. I _____ |
| 5. I _____ | 16. B _____ |
| 6. S _____ | 17. S _____ |
| 7. P _____ | 18. D _____ |
| 8. B _____ | 19. G _____ |
| 9. N _____ | 20. S _____ |
| 10. F _____ | 21. L _____ |
| 11. N _____ | |



Map of Europe



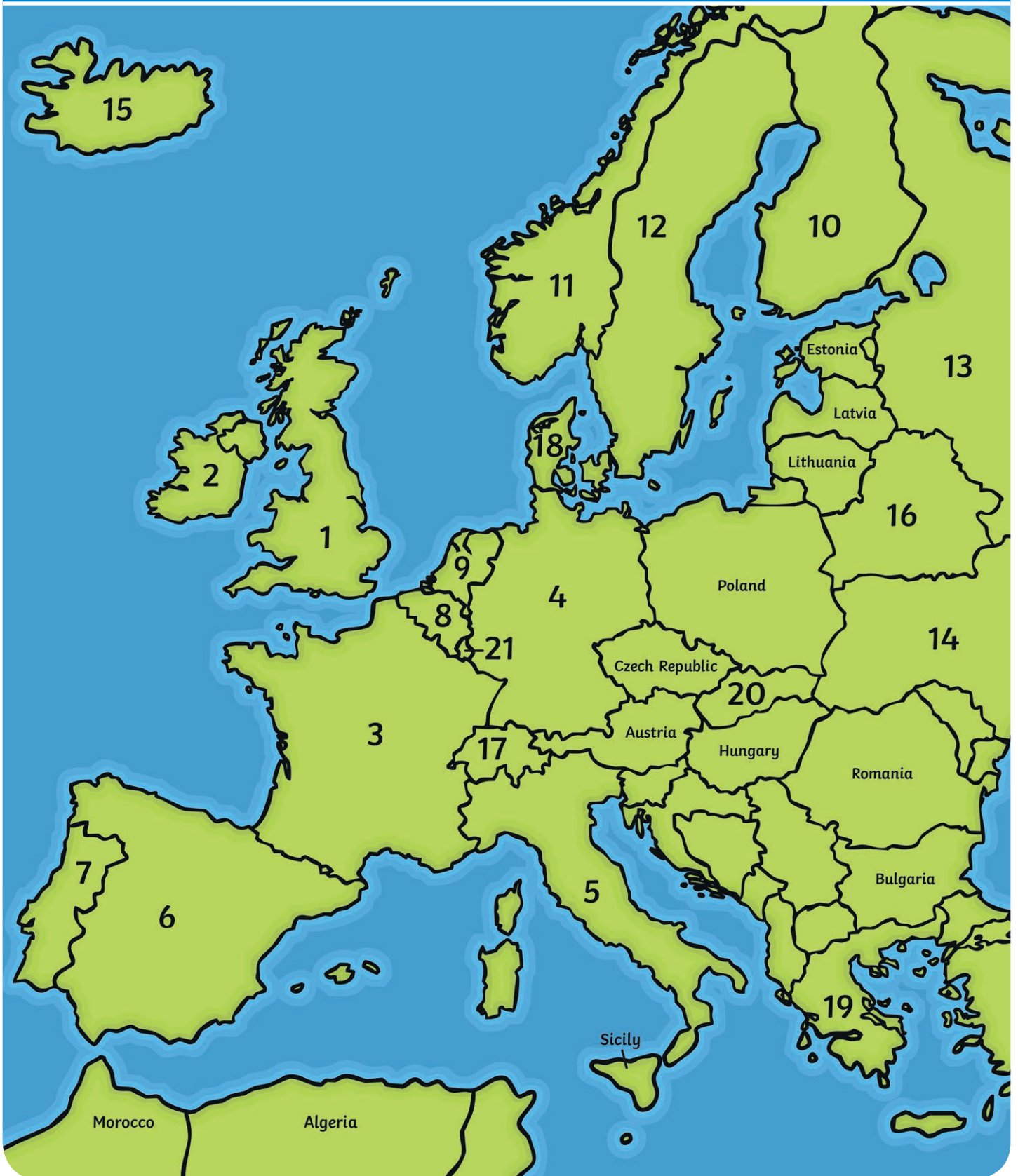
Country Names

How well do you know Europe? Fill in the names of the numbered countries. Don't forget capital letters!

1. _____
2. _____
3. F _____
4. G _____
5. I _____
6. _____
7. _____
8. B _____
9. _____
10. F _____
11. _____
12. _____
13. _____
14. U _____
15. _____
16. B _____
17. S _____
18. _____
19. G _____
20. S _____
21. L _____



Map of Europe




Country Names

How well do you know Europe? Fill in the names of the numbered countries. Don't forget capital letters!

- | | |
|-----------|-----------|
| 1. _____ | 12. _____ |
| 2. _____ | 13. _____ |
| 3. _____ | 14. _____ |
| 4. _____ | 15. _____ |
| 5. _____ | 16. _____ |
| 6. _____ | 17. _____ |
| 7. _____ | 18. _____ |
| 8. _____ | 19. _____ |
| 9. _____ | 20. _____ |
| 10. _____ | 21. _____ |
| 11. _____ | |

Extension

Using a map or atlas, how many more **European** countries can you name? Continue your list on this page, but don't forget to number the countries on the map too!



Country Names Answers

1. United Kingdom
2. Republic of Ireland
3. France
4. Germany
5. Italy
6. Spain
7. Portugal
8. Belgium
9. Netherlands
10. Finland
11. Norway
12. Sweden
13. Russia
14. Ukraine
15. Iceland
16. Belarus
17. Switzerland
18. Denmark
19. Greece
20. Slovakia
21. Luxembourg

