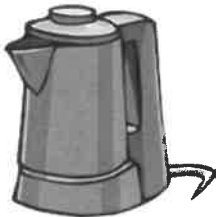



To investigate circuits and

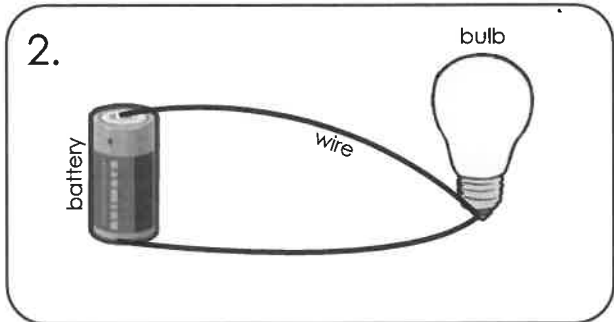
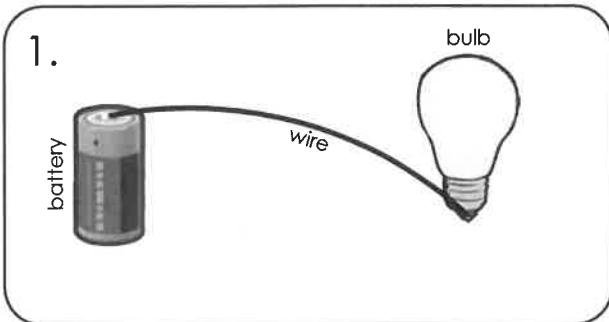
Name: their different components Date: 12/1/21



Which of the objects below use electricity and which don't? Circle the objects that need electricity to work.



Electricity needs a complete circuit to work. Which of these circuits would light up the bulb and which wouldn't? Explain your choice.



Which circuit would work? Circuit 1 Circuit 2

Why? _____

