

Monday 1st February 2021

Green Group

Hello Class 4

Find the area of the triangles by using the formula '1/2 the base x the height' or 'base x height divided by 2.'

Find the area of the shaded regions:

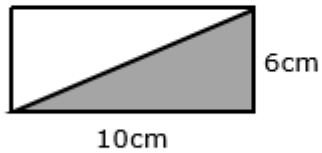
1)



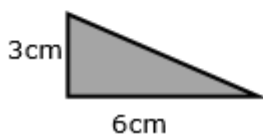
2)



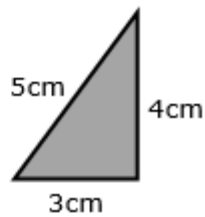
3)



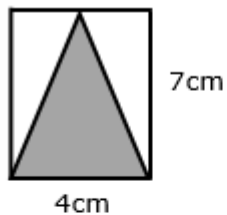
4)



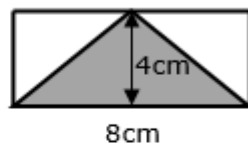
5)



6)



7)



8) Using the letters b and h, write a formula for the area of this triangle:

