

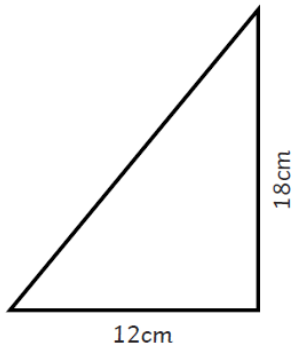
Monday 1<sup>st</sup> February 2021

[Blue Group](#)

To calculate the area of these triangles, multiply the base by the height and divide by 2.

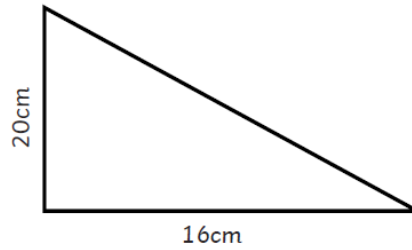
$$(b \times h) \div 2$$

1.



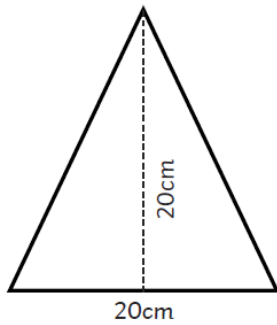
area =

2.



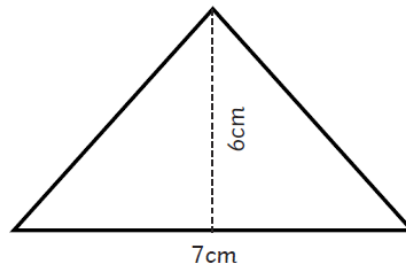
area =

3.



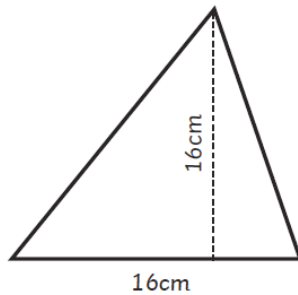
area =

4.



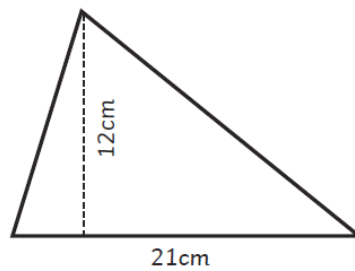
area =

5.



area =

6.



area =