

Thursday 28<sup>th</sup> January 2021

Blue Group

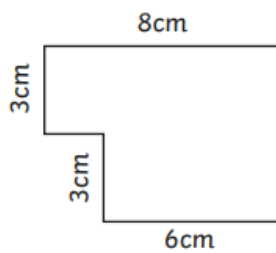
Can you find the area of each compound shape?

## Area of Compound Shapes

I can calculate the area of compound shapes.

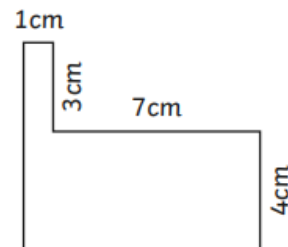
Identify the shapes where the area can be calculated. Calculate the area of each compound shape.

1.



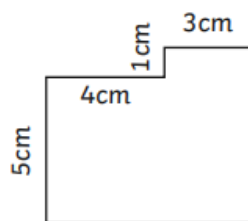
Total: \_\_\_\_\_

2.



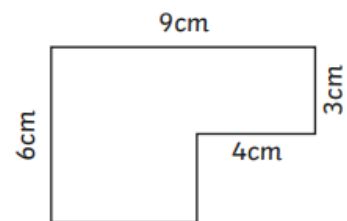
Total: \_\_\_\_\_

3.



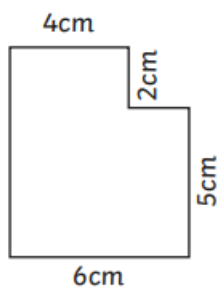
Total: \_\_\_\_\_

4.



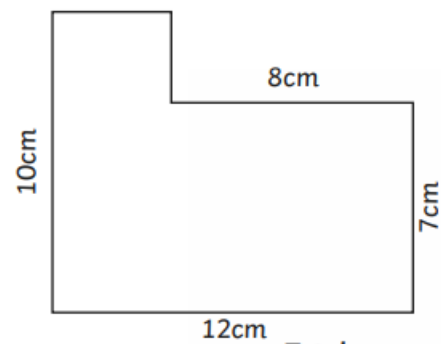
Total: \_\_\_\_\_

5.



Total: \_\_\_\_\_

6.



Total: \_\_\_\_\_