

Thursday 28<sup>th</sup> January 2021

Red Group

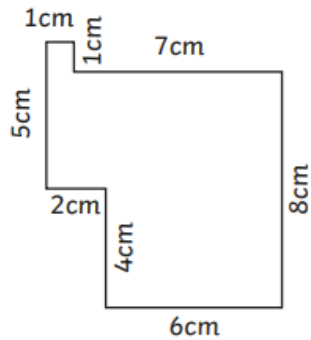
Can you find the area of each compound shape?

## Area of Compound Shapes

I can calculate the area of compound shapes.

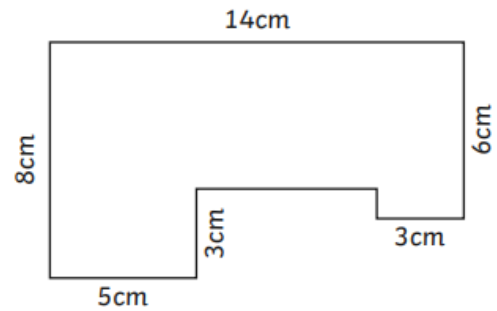
Identify the shapes where the area can be calculated. Calculate the area of each compound shape.

7.



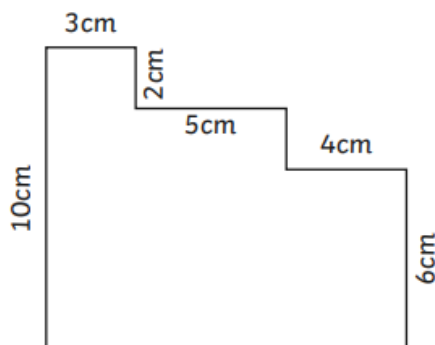
Total: \_\_\_\_\_

8.



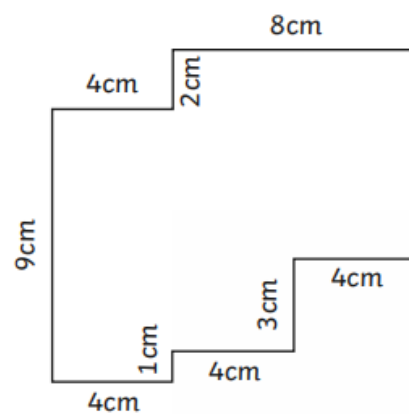
Total: \_\_\_\_\_

9.



Total: \_\_\_\_\_

10.



Total: \_\_\_\_\_