



What Am I?

A shape description game


Click on the numbers for clues.

1 I have 6 square faces

2 I have 8 vertices

3 I have 12 edges


What am I?



Click on the numbers for clues.

- 1 I have 6 faces, at least 4 of which are rectangular
- 2 I have 8 vertices
- 3 I have 12 edges

What am I?



Click on the numbers for clues.

1

I have 5 faces, at least 4 of which are triangular


2

I have 5 vertices

3

I have 8 edges


What am I?



Click on the numbers for clues.

- 1 I have 1 continuous curved surface
- 2 I have 0 vertices
- 3 I have 0 edges


What am I?



Click on the numbers for clues.

- 1 I have 5 faces (two of these are triangular)
- 2 I have 6 vertices
- 3 I have 9 edges


What am I?



Click on the numbers for clues.

- 1 I have 2 faces and 1 continuous curved surface
- 2 I have 0 vertices
- 3 I have 2 edges


What am I?



Click on the numbers for clues.

- 1** I have 1 circular face and 1 continuous curved surface
- 2** I have 0 vertices
- 3** I have 1 edge

What am I?




Click on the numbers for clues.

1 I have 4 triangular faces

2 I have 4 vertices

3 I have 6 edges


What am I?



Click on the numbers for clues.

- 1 I have 7 faces (two are pentagon shaped)
- 2 I have 10 vertices
- 3 I have 15 edges


What am I?



Click on the numbers for clues.

- 1 I have 8 faces (2 are hexagon shaped)
- 2 I have 12 vertices
- 3 I have 18 edges


What am I?



Click on the numbers for clues.

- 1** I have 10 faces (2 are octagon shaped)
- 2** I have 16 vertices
- 3** I have 24 edges

What am I?



Click on the numbers for clues.

- 1** I have 8 faces (all are equilateral triangles)
- 2** I have 6 vertices
- 3** I have 12 edges

What am I?

