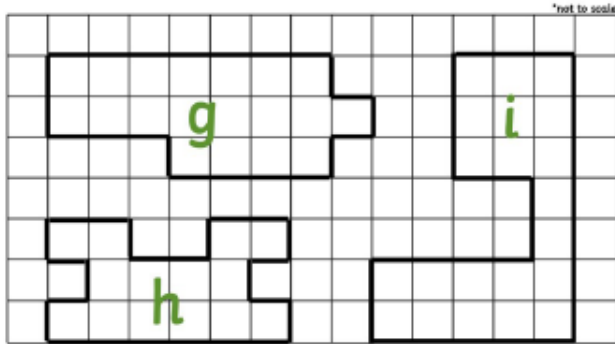


Tuesday 26th January 2021

Blue Group

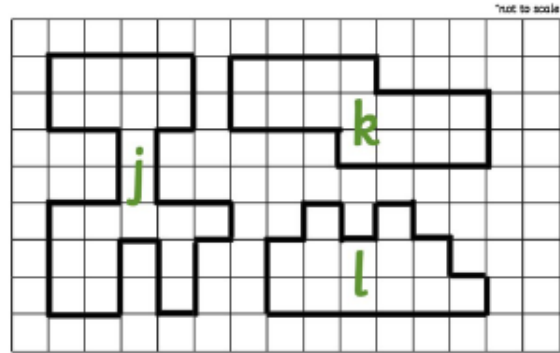
Each square represents 1cm. Can you find the perimeter of the shapes below? Your challenge is the one in the blue box!

Find the perimeter of these shapes in cm.



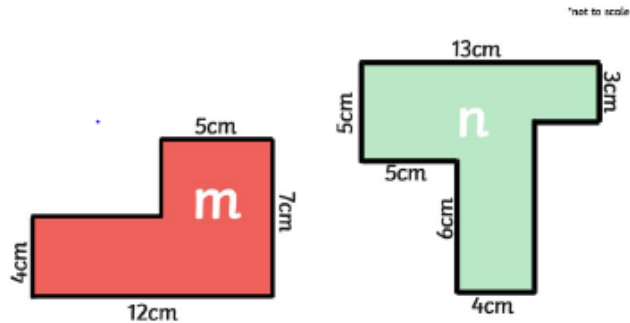
On centimetre squared paper, draw 3 rectilinear shapes with a perimeter of 8cm.

Find the perimeter of these shapes in cm.



On centimetre squared paper, draw 3 rectilinear shapes with a perimeter of 26cm.

Find the perimeter of these shapes in cm.



Draw a rectilinear shape with a perimeter of 38 cm. Mark the length of each side.