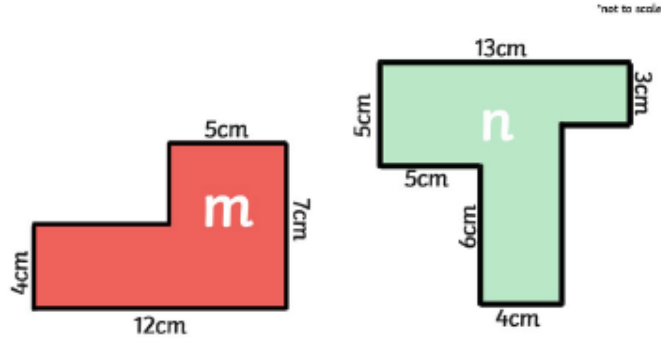


Tuesday 26th January 2021

Red Group

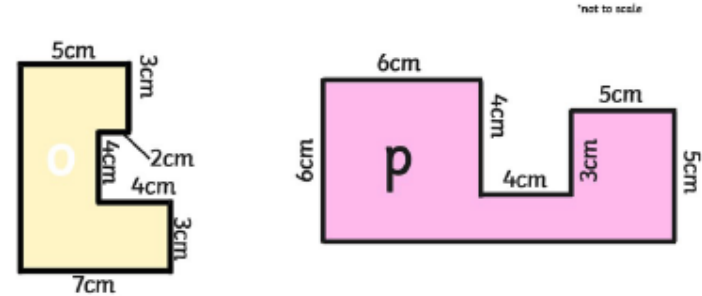
Choose 2 out of the 4 activities below to complete. The bottom two are more challenging! You can work out the missing lengths by using existing measurements provided on the shapes.

Find the perimeter of these shapes in cm.



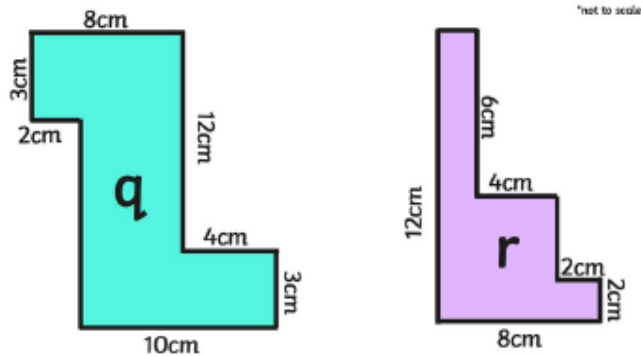
Draw a rectilinear shape with a perimeter of 38 cm. Mark the length of each side.

Find the perimeter of these shapes in cm.



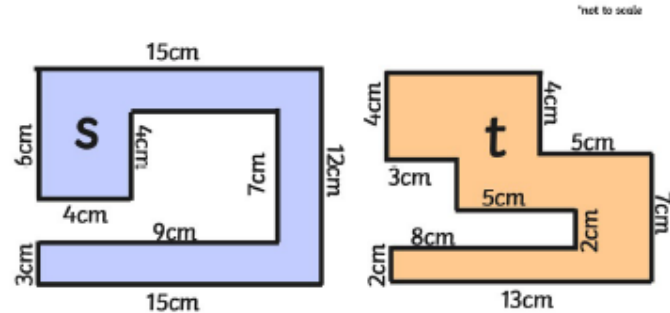
Draw a rectilinear shape with a perimeter of 48 cm. Mark the length of each side.

Find the perimeter of these shapes in cm.



Draw a rectilinear shape with a perimeter of 56 cm. Mark the length of each side.

Find the perimeter of these shapes in cm.



Draw a rectilinear shape with a perimeter of 76 cm. Mark the length of each side.

