

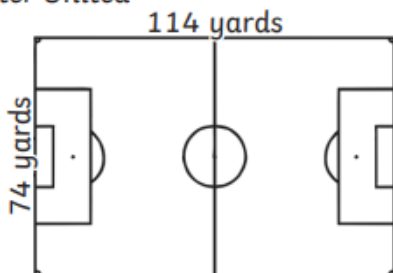
Wednesday 27<sup>th</sup> January 2021

Red Group

Can you use your knowledge of short multiplication to work out the area of these football pitches?

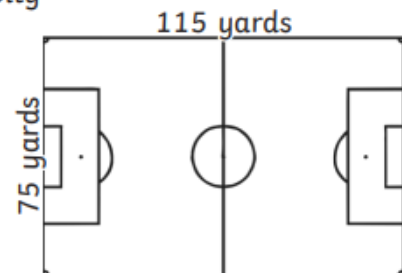
- 1) Here are the sizes of the pitches of six football clubs. Calculate the area of each pitch in square yards and write them in order from smallest (1) to largest (6).  
We write square yards as  $\text{yd}^2$ .

Manchester United



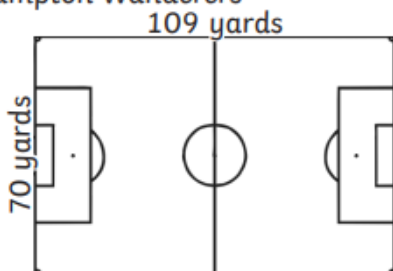
Area = \_\_\_\_\_  $\text{yd}^2$       Order = \_\_\_\_\_

Bristol City



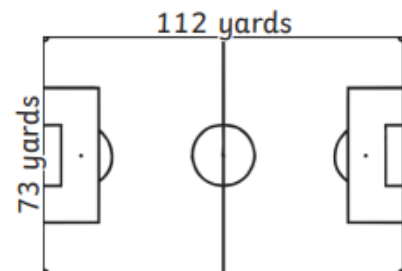
Area = \_\_\_\_\_  $\text{yd}^2$       Order = \_\_\_\_\_

Wolverhampton Wanderers



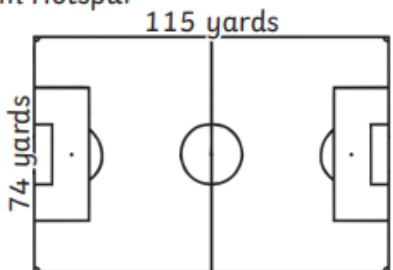
Area = \_\_\_\_\_  $\text{yd}^2$       Order = \_\_\_\_\_

Chelsea



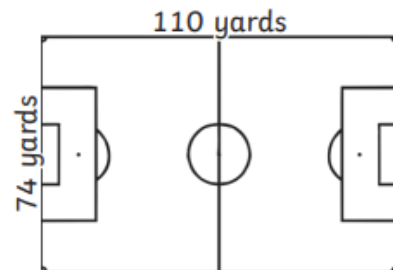
Area = \_\_\_\_\_  $\text{yd}^2$       Order = \_\_\_\_\_

Tottenham Hotspur



Area = \_\_\_\_\_  $\text{yd}^2$       Order = \_\_\_\_\_

Everton



Area = \_\_\_\_\_  $\text{yd}^2$       Order = \_\_\_\_\_