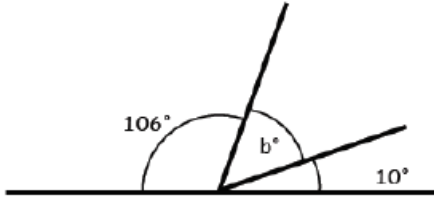
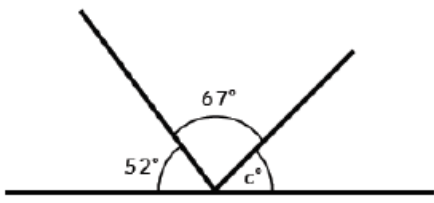
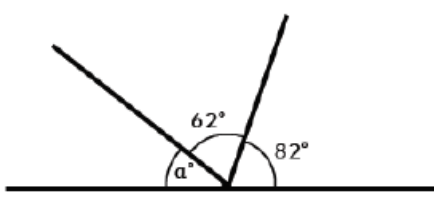
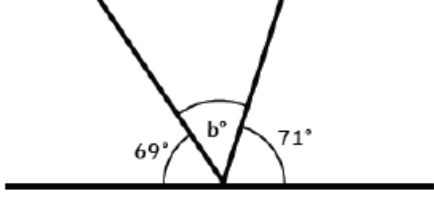
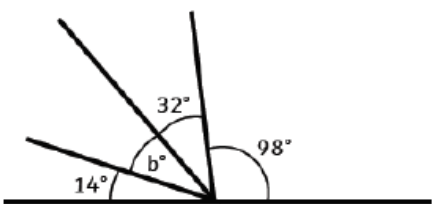
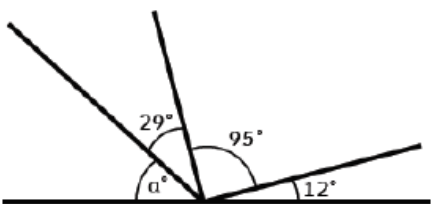
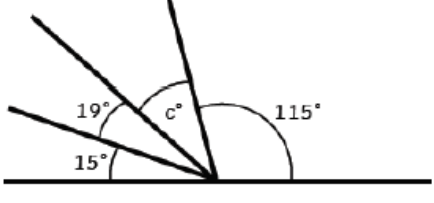
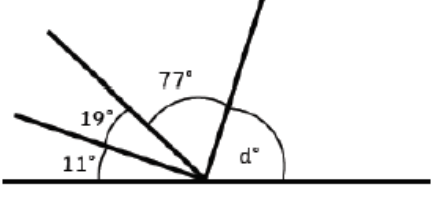


Monday 8th February 2021

Blue Group

Calculate the missing angles:

<p>1.</p>  <p>$b = \text{-----}^\circ$</p>	<p>2.</p>  <p>$c = \text{-----}^\circ$</p>
<p>3.</p>  <p>$a = \text{-----}^\circ$</p>	<p>4.</p>  <p>$b = \text{-----}^\circ$</p>
<p>5.</p>  <p>$b = \text{-----}^\circ$</p>	<p>6.</p>  <p>$a = \text{-----}^\circ$</p>
<p>7.</p>  <p>$c = \text{-----}^\circ$</p>	<p>8.</p>  <p>$d = \text{-----}^\circ$</p>