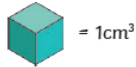


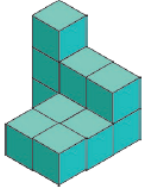
Thursday 4th February 2021

Blue Group

- 1) Find the volume of each shape. Then, order them from the greatest volume to the smallest volume.

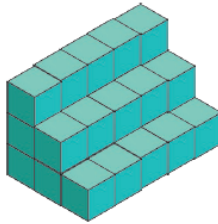


a)




_____cm³

b)



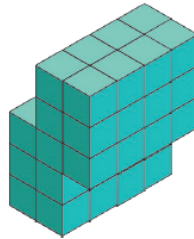
_____cm³

c)



_____cm³

d)



_____cm³

- 2) Which of these amounts shows the greatest volume? Which is the smallest volume? How do you know?


1mm³

1m³

1cm³

- 3) How many more 1cm³ interlocking cubes will need to be added to each model to make a complete cube with sides of 3cm?

a)



b)

