

Tuesday

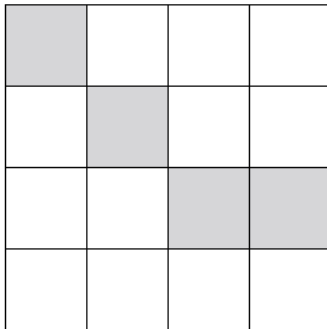
Green Group



Introducing Ratio

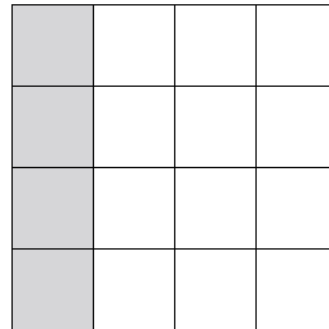
2. For each grid, write the ratio. Rearrange the blank grid so that it shows how many shaded squares match to blank, then write the simplest equivalent ratio. The first one is done for you.

a.



shaded to blank

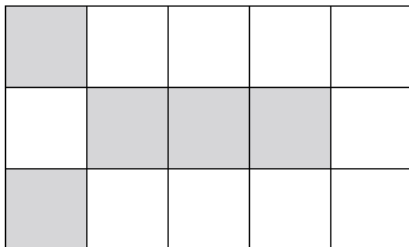
4 : 12



shaded to blank

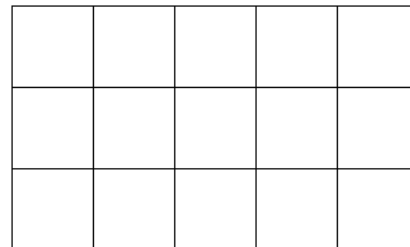
1 : 3

b.



shaded to blank


:



shaded to blank

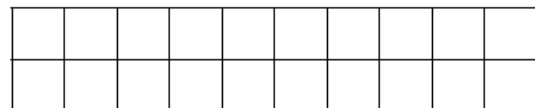
:

c.



shaded to blank

:



shaded to blank

:

