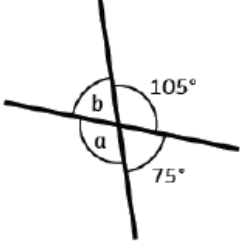
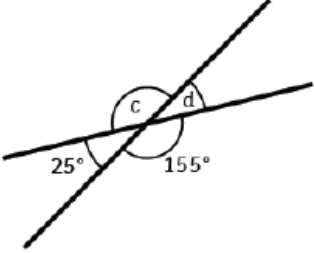
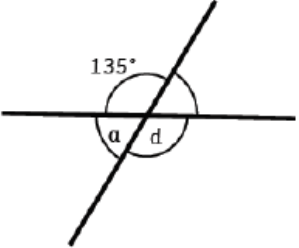
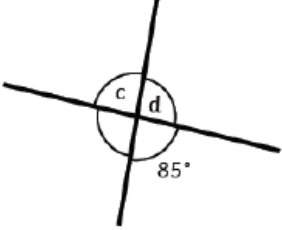
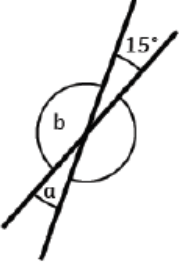
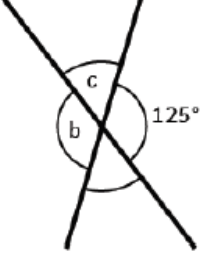
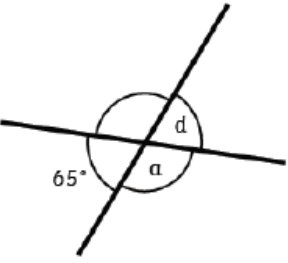
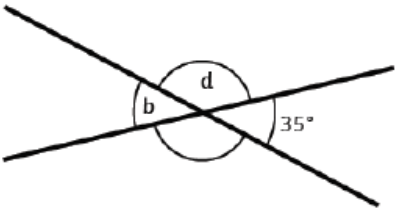


Tuesday 9<sup>th</sup> February 2021

Blue Group

Calculate the missing angles:

1.  $a = \text{-----}^\circ$ $b = \text{-----}^\circ$	2.  $c = \text{-----}^\circ$ $d = \text{-----}^\circ$
3.  $a = \text{-----}^\circ$ $d = \text{-----}^\circ$	4.  $c = \text{-----}^\circ$ $d = \text{-----}^\circ$
5.  $a = \text{-----}^\circ$ $b = \text{-----}^\circ$	6.  $b = \text{-----}^\circ$ $c = \text{-----}^\circ$
7.  $a = \text{-----}^\circ$ $d = \text{-----}^\circ$	8.  $b = \text{-----}^\circ$ $d = \text{-----}^\circ$