

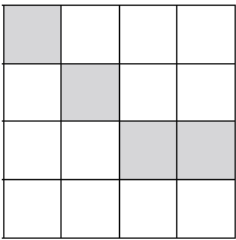
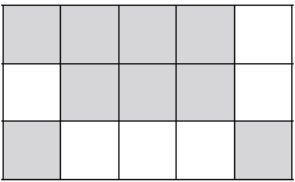
Tuesday

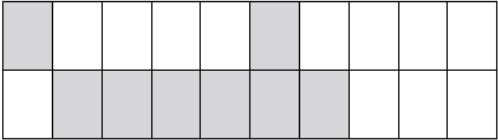
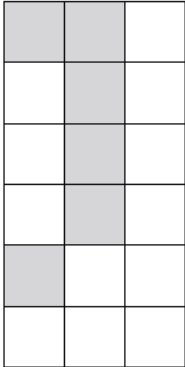
Red Group



Introducing Ratio

3. For each grid write the ratio as you see it, then write the ratio in its simplest form. Show your working out. The first one is done for you.

<p>a.</p>  <p style="text-align: center;">shaded to blank</p> <p style="text-align: center;">4:12</p> <div style="display: flex; justify-content: space-around; align-items: center;"><div style="text-align: center;">\swarrow $\div 4 = 1$</div><div style="text-align: center;">\searrow $\div 4 = 3$</div></div> <p style="text-align: center; margin-top: 20px;">1:3</p>	<p>b.</p>  <p style="text-align: center;">shaded to blank</p> <div style="text-align: center; margin-top: 10px;"><input style="width: 80px; height: 20px;" type="text"/></div> <div style="text-align: center; margin-top: 40px;"><input style="width: 80px; height: 20px;" type="text"/></div>
---	---

<p>c.</p>  <p style="text-align: center;">shaded to blank</p> <div style="text-align: center; margin-top: 10px;"><input style="width: 80px; height: 20px;" type="text"/></div> <div style="text-align: center; margin-top: 40px;"><input style="width: 80px; height: 20px;" type="text"/></div>	<p>d.</p>  <p style="text-align: center;">shaded to blank</p> <div style="text-align: center; margin-top: 10px;"><input style="width: 80px; height: 20px;" type="text"/></div> <div style="text-align: center; margin-top: 40px;"><input style="width: 80px; height: 20px;" type="text"/></div>
--	---

