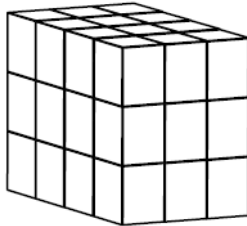
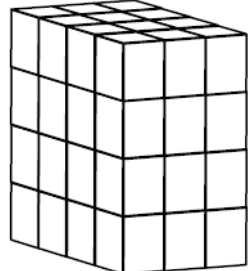
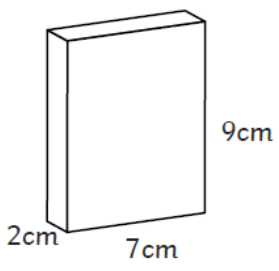
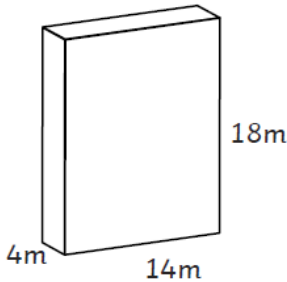


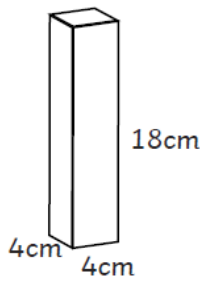
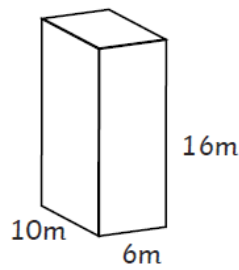
Wednesday 3<sup>rd</sup> February 2021

Blue Group

1. Calculate the volume of these shapes.

<p>a)</p>  <p>Each small cube is a cubic centimetre.</p> <p>volume = <input type="text"/> cm<sup>3</sup></p>	<p>b)</p>  <p>Each small cube is a cubic metre.</p> <p>volume = <input type="text"/> m<sup>3</sup></p>
---	--

<p>c)</p>  <p>2cm 7cm 9cm</p> <p>volume = <input type="text"/></p>	<p>d)</p>  <p>4m 14m 18m</p> <p>volume = <input type="text"/></p>
---	---

<p>e)</p>  <p>4cm 4cm 18cm</p> <p>volume = <input type="text"/></p>	<p>f)</p>  <p>10m 6m 16m</p> <p>volume = <input type="text"/></p>
--	---