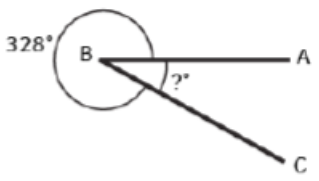
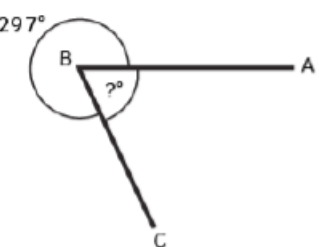
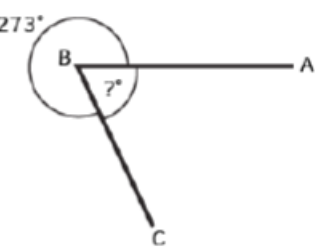
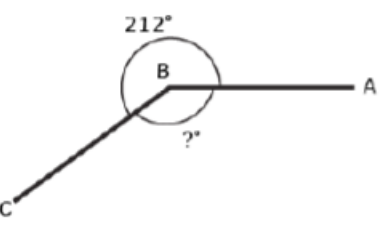
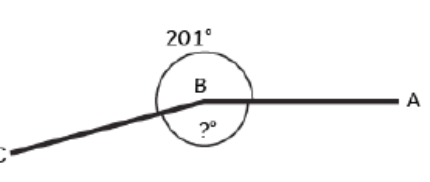
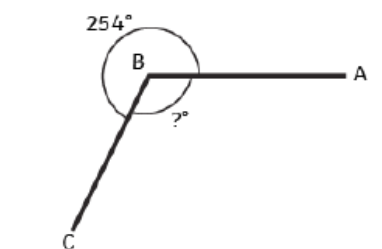
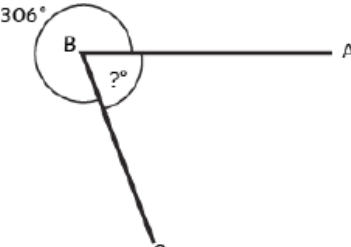
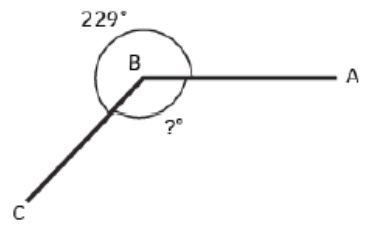


Wednesday 10<sup>th</sup> February 2021

Red Group

Calculate the missing angles:

1.  $\angle ABC = \text{-----}^\circ$	2.  $\angle ABC = \text{-----}^\circ$
3.  $\angle ABC = \text{-----}^\circ$	4.  $\angle ABC = \text{-----}^\circ$
5.  $\angle ABC = \text{-----}^\circ$	6.  $\angle ABC = \text{-----}^\circ$
7.  $\angle ABC = \text{-----}^\circ$	8.  $\angle ABC = \text{-----}^\circ$

